


R (Read the problem carefully.)

Clark has 3 ten-dollar bills and 6 five-dollar bills. He has 2 more ten-dollar bills and 2 more five-dollar bills than Shannon. How much money does Shannon have?

D (Draw a picture.)

W (Write and solve an equation.)







W (Write a statement that matches the story.)

Name _____

Date _____

Write another way to make the same total value.

<p>1. 26 cents</p>  <p>2 dimes 1 nickel 1 penny is 26 cents.</p>	<p>Another way to make 26 cents:</p>
<p>2. 35 cents</p>  <p>3 dimes and 1 nickel make 35 cents.</p>	<p>Another way to make 35 cents:</p>
<p>3. 55 cents</p>  <p>2 quarters and 1 nickel make 55 cents.</p>	<p>Another way to make 55 cents:</p>
<p>4. 75 cents</p>  <p>The total value of 3 quarters is 75 cents.</p>	<p>Another way to make 75 cents:</p>

5. Gretchen has 45 cents to buy a yo-yo. Write two coin combinations she could have paid with that would equal 45 cents.

--	--

6. The cashier gave Joshua 1 quarter, 3 dimes, and 1 nickel. Write two other coin combinations that would equal the same amount of change.

--	--

7. Alex has 4 quarters. Nicole and Caleb have the same amount of money. Write two other coin combinations that Nicole and Caleb could have.

--	--

Name _____

Date _____

Smith has 88 pennies in his piggy bank. Write two other coin combinations he could have that would equal the same amount.

--	--