


R (Read the problem carefully.)

Gemma is counting animals in the park. She counts 16 robins, 19 ducks, and 17 squirrels. How many more robins and ducks did Gemma count than squirrels?

D (Draw a picture.)

W (Write and solve an equation.)



W (Write a statement that matches the story.)

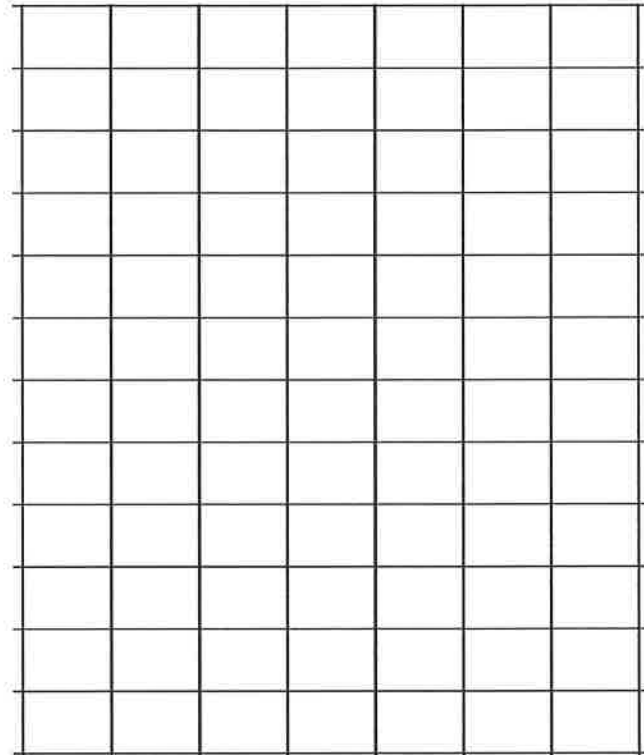
Name _____

Date _____

1. Use grid paper to create a picture graph below using data provided in the table. Then, answer the questions.

Central Park Zoo Animal Classification			
Birds	Fish	Mammals	Reptiles
6	5	11	3

Title: _____



- a. How many more animals are mammals than fish? _____
- b. How many more animals are mammals and fish than birds and reptiles? _____
- c. How many fewer animals are reptiles than mammals? _____

Legend: _____

- d. Write and answer your own comparison question based on the data.


Question: _____

Answer: _____

2. Use the table below to create a picture graph in the space provided.

Animal Habitats		
Desert	Tundra	Grasslands

Title: _____



Legend: _____

- a. How many more animal habitats are in the grasslands than in the desert? _____
- b. How many fewer animal habitats are in the tundra than in the grasslands and desert combined? _____
- c. Write and answer your own comparison question based on the data.

Question: _____

Answer: _____